



TOURISM

GRADE 11

REVISION QUESTIONS

TERM 3

**TOPIC: DOMESTIC, REGIONAL AND
INTERNATIONAL TOURISM**

CONTENT: REGIONAL TOURISM

All the questions in this document were sourced from previous ECDoE provincial question papers.

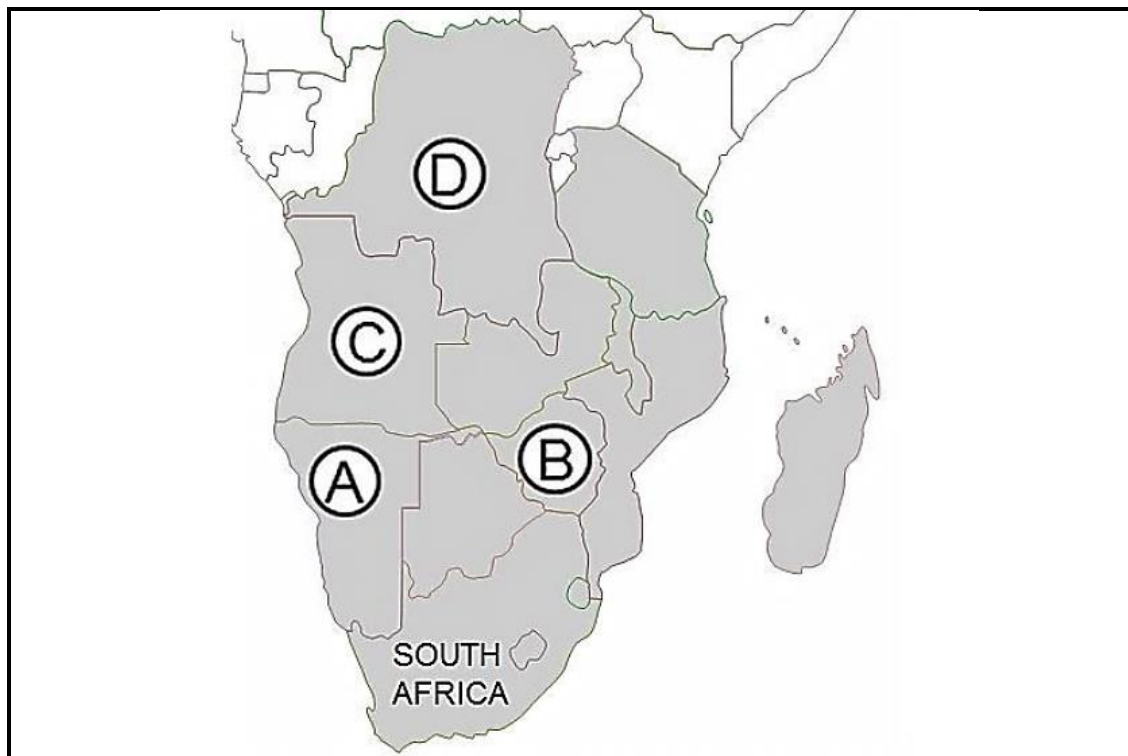
This document consists of 7 pages.

TOPIC: DOMESTIC, REGIONAL AND INTERNATIONAL TOURISM

CONTENT: REGIONAL TOURISM

**NOV 2014 EC
QUESTION 8**

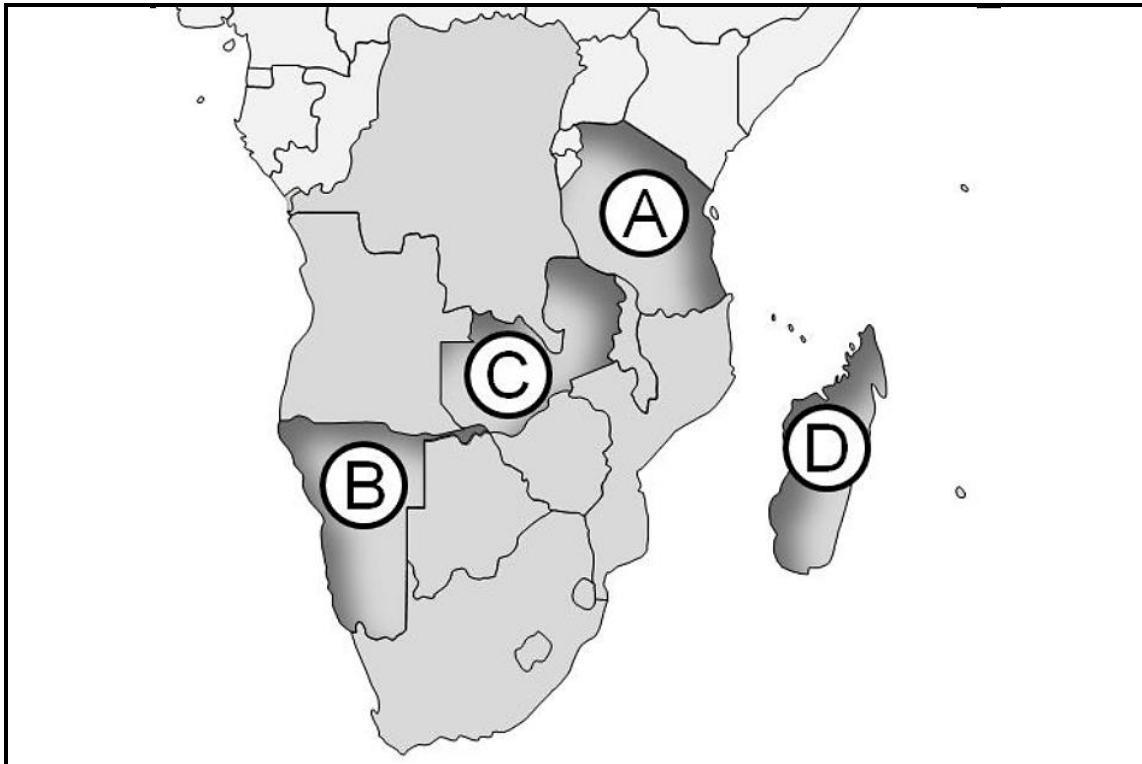
8.1 Study the map of the SADC member countries and answer the questions.



- 8.1.1 Name the airport located in the capital city of the country labelled **C**. (1)
- 8.1.2 Name the capital city of the country labelled **D**. (1)
- 8.1.3 Name the border crossing that tourists will use when travelling by road between South Africa and the country labelled **B**. (1)
- 8.1.4 Name the harbour in the country labelled **A** that is used as a port for cruise liners. (1)
- 8.2 Under the umbrella organisation, RETOSA, the 15 members of the SADC aim to increase tourist arrivals to the region by marketing this part of the African continent as a single destination with many diversified tourist attractions.
- 8.2.1 Write out the acronym 'RETOSA' in full. (2)
- 8.2.2 Write a paragraph discussing the economic benefits for SADC member countries of becoming a regional tourism destination of choice. (4 x 1) (4)

**NOV 2015 EC
QUESTION 8**

8.3 Study the map of the SADC member countries and answer the questions.



- 8.3.1 Name the capital city of the country labelled **A**. (1)
- 8.3.2 Write the letter and name of the country that tourists will be visiting when arriving in the gateway city of Antananarivo. (2 x 1) (2)
- 8.3.3 Write the letter and name of the country that lies to the east of Angola. (2 x 1) (2)

8.4 Read the RETOSA extract and answer the questions.

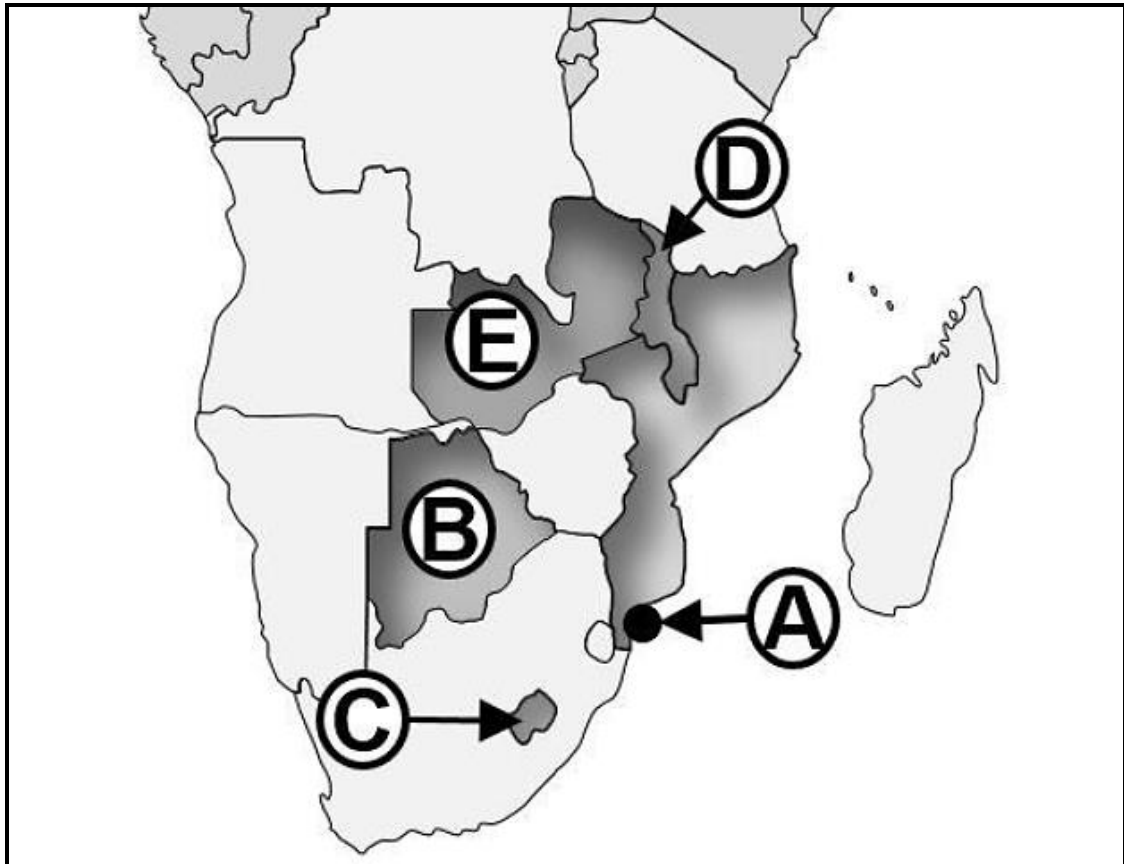
“The more we know of each other’s tourism products and heritage, the better we will be able to promote each other which ultimately would lead to improved tourism across member countries.”

[RETOSA Executive Director, Francis Mfunne]

- 8.4.1 Name the intergovernmental organisation that Mr Mfunne is referring to in the extract. (1)
- 8.4.2 Explain the link between RETOSA and the organisation referred to in QUESTION 8.4.1 (2)
- 8.4.3 Write a paragraph discussing TWO economic benefits of increased regional tourism for South Africa. (2 x 2) (4)

NOV 2016 EC
QUESTION 8

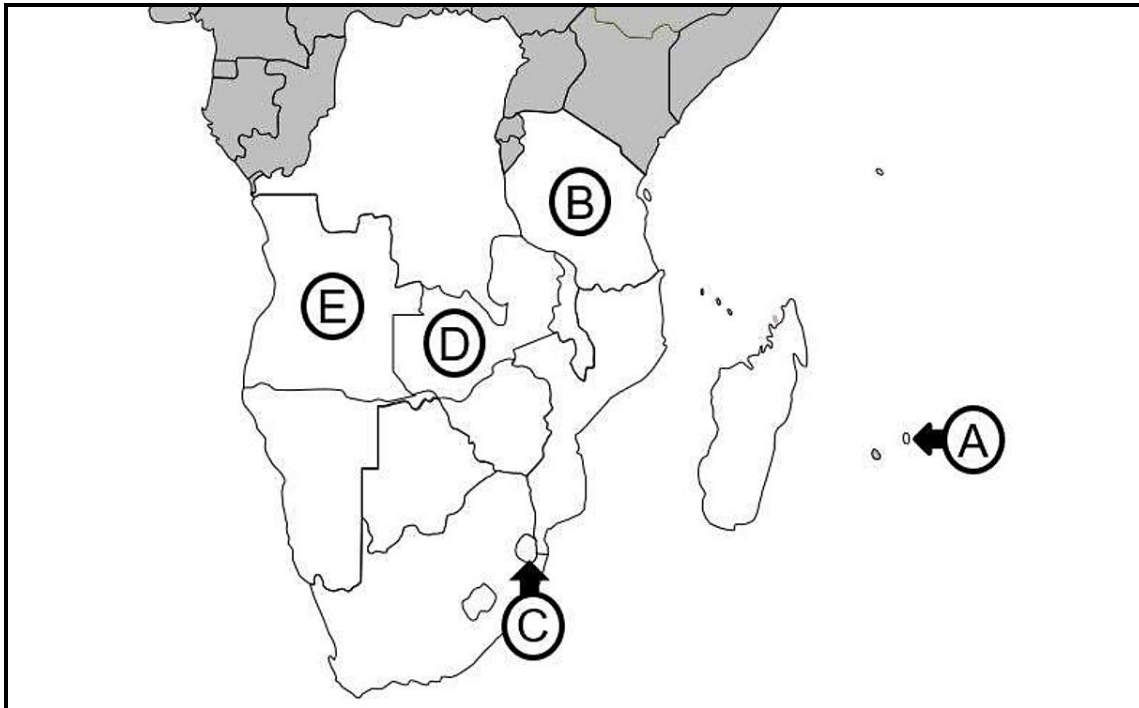
8.2 Study the map of the SADC member countries and answer the questions.



- 8.2.1 Name the country labelled **C**. (1)
- 8.2.2 Name the capital city of the country labelled **D**. (1)
- 8.2.3 Write the letter and name of the country that lies to the south-west of Zimbabwe. (2 x 1) (2)
- 8.2.4 Write the name of the country and the gateway port city labelled **A** that tourists will visit while on a MSC Cruise. (2 x 1) (2)

**NOV 2017 EC
QUESTION 8**

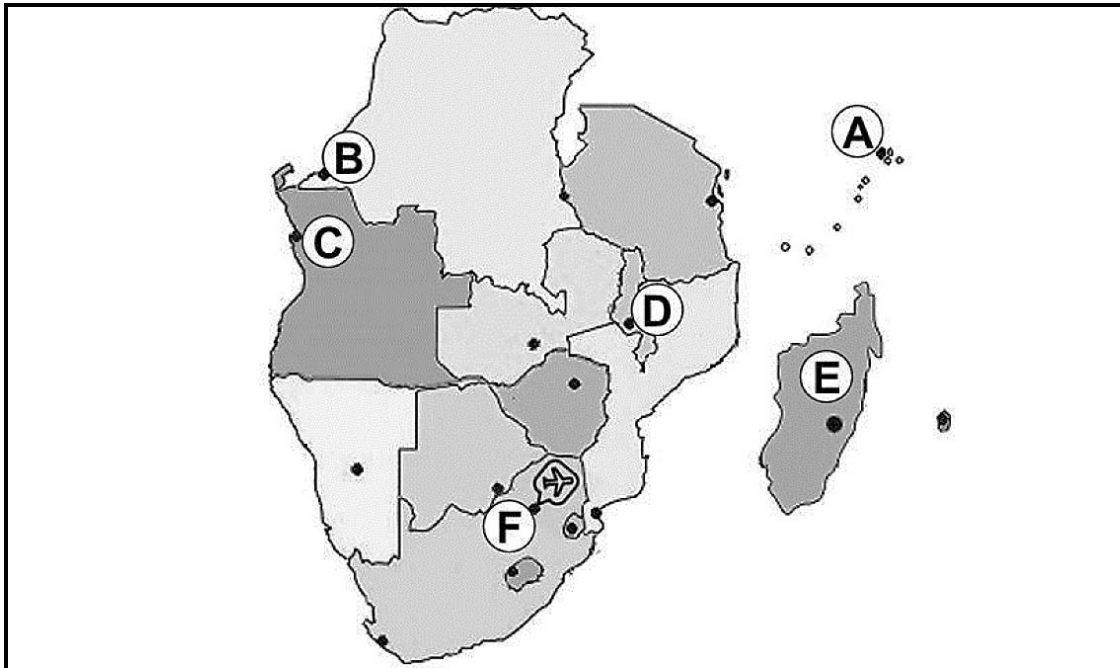
8.3 Study the map of the SADC member countries and answer the questions.



- 8.3.1 Name the country labelled **D**. (1)
- 8.3.2 Name the capital city of the country labelled **E**. (1)
- 8.3.3 Write the letter of the country that tourists will be visiting when arriving in the gateway city of Dodoma. (1)
- 8.3.4 Name ONE type of transport that leisure tourists from South Africa will mainly use when planning to visit the country labelled **A**. (1)
- 8.4 Travelling in Southern Africa is an unforgettable experience. It is a region of extremes – a world in 15 countries.
- 8.4.1 Name the SADC body responsible for the development of tourism and regional destination marketing across the 15 Southern African countries. (2)
- 8.4.2 Discuss ONE advantage of regional tourism for the SADC member countries. (2)


**NOV 2018 EC
QUESTION 8**

8.2 Study the map of the SADC member countries and answer the questions.



- 8.2.1 Name the country labelled **E**. (1)
- 8.2.2 Name the capital cities labelled **A**, **B**, **C** and **D**. (4 x 1) (4)
- 8.2.3 Identify the major gateway labelled **F**. (1)

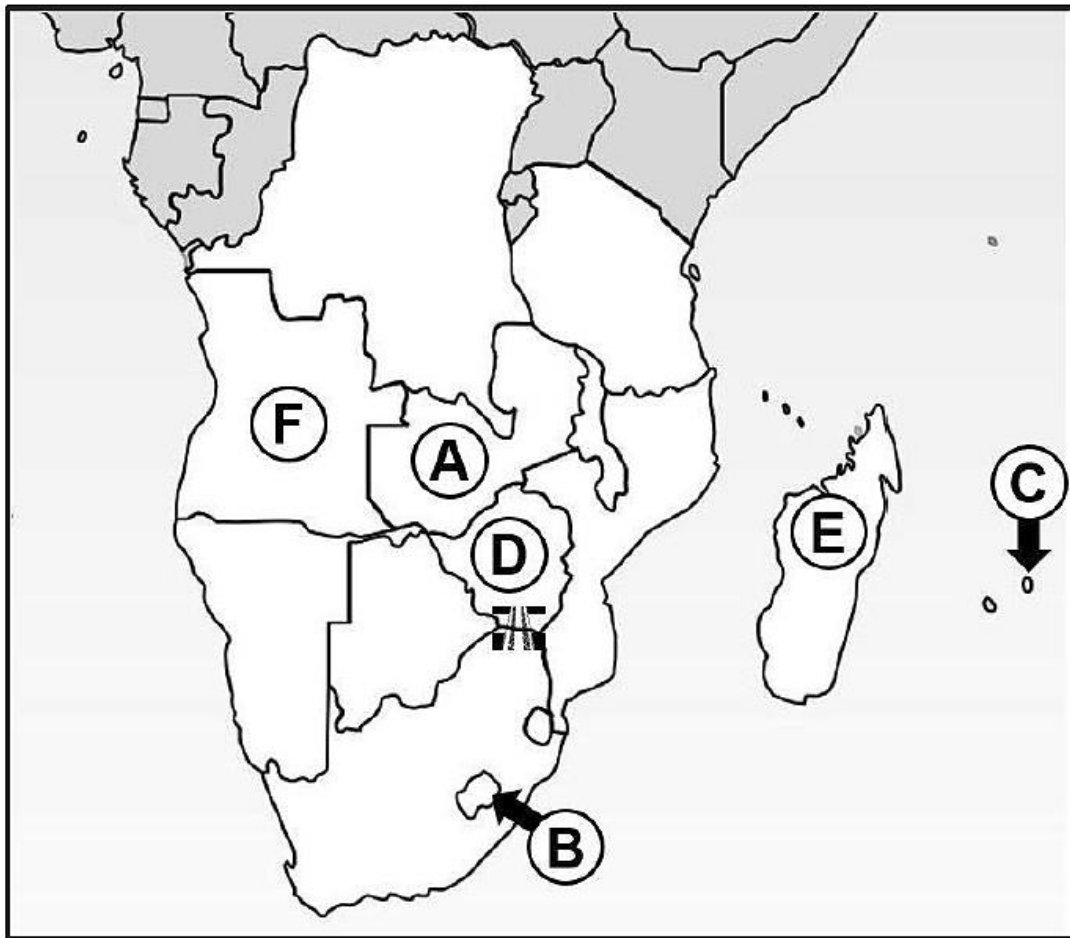
8.3 Study the logos below and answer the questions.



- 8.3.1 Name the SADC body that the national tourism organisations shown above collaborate with in order to promote inbound tourism to Southern Africa. (2)
- 8.3.2 Explain how SADC member countries will benefit by collaborating to increase inbound tourism to Southern Africa. (2)

NOV 2019 EC
QUESTION 8

8.2 Study the map of the SADC member countries and answer the questions.



- 8.2.1 Name the countries labelled **A**, **C** and **E**. (3 x 1) (3)
- 8.2.2 Name the capital cities labelled **B** and **F**. (2 x 1) (2)
- 8.2.3 Give the name of the major gateway that is used by persons from the country labelled **D** to enter South Africa. (1)